

Palin - Vinklar


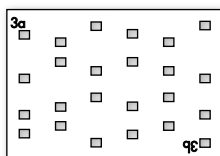
Innehåll:

Spetsig, trubbig, rät, rak, konvex och hel vinkel	Övning 1-2
Spetsig, trubbig och rätvinklig triangel	Övning 3
Mäta vinklar (gradskiva behövs)	Övning 4
Uppskatta vinklar	Övning 5
Supplement-, komplement- och explementvinkel	Övning 6-8
Basvinkel, toppvinkel, yttervinkel	Övning 9
Vinkelsumma triangel	Övning 10
Likbenta trianglar	Övning 11
Räkna ut yttervinkel	Övning 12
Vinkelsumma fyrhörning	Övning 13
Vertikalvinklar och sidovinklar	Övning 14
Likbelägna vinklar och alternativvinklar	Övning 15
Vinkeltest	Övning 16

1

Underlägg 3
Hålskiva 3a

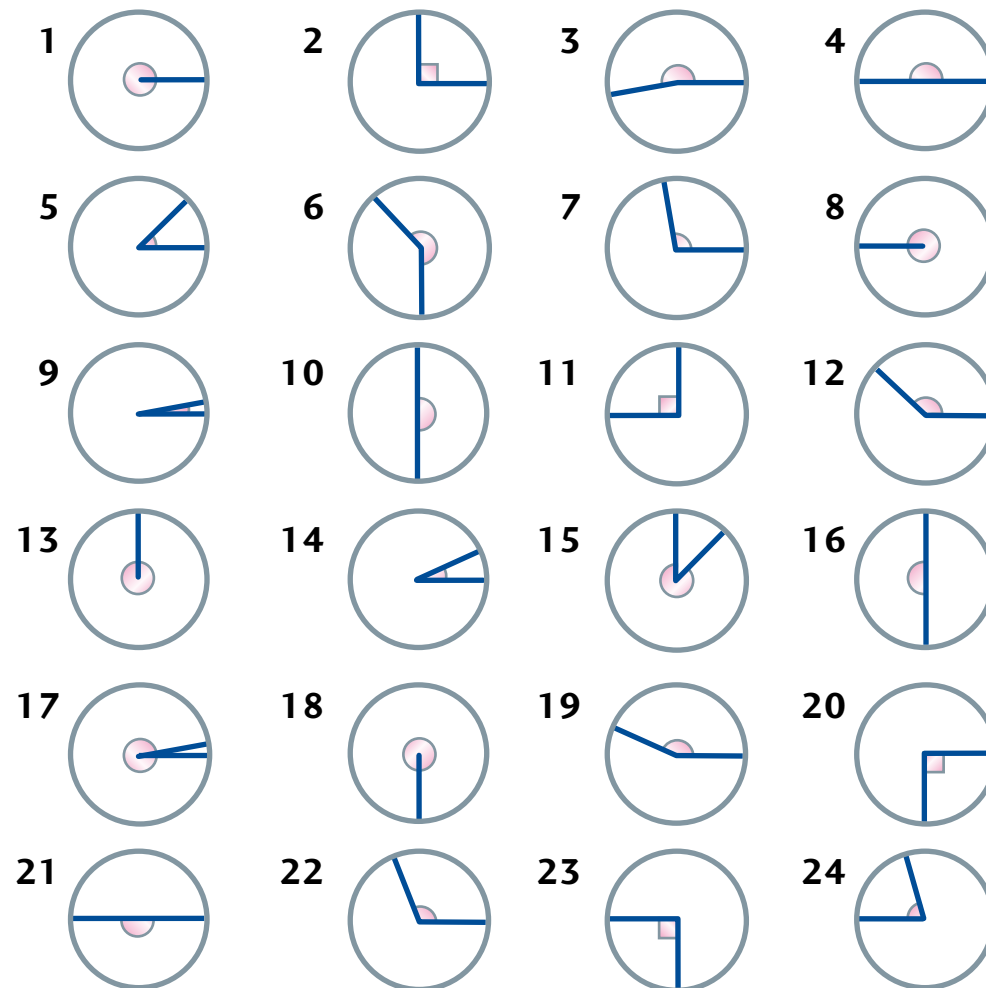
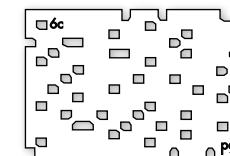
Trubbig, spetsig eller rät vinkel?



2

Underlägg 6
Hålskiva 6c

Spetsig, trubbig, rät, rak, konvex eller hel vinkel?



trubbig

spetsig

rät

spetsig

trubbig

rät

rak

konvex

hel

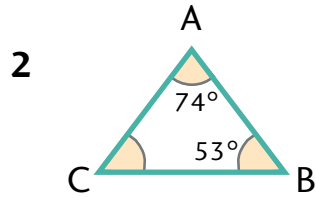
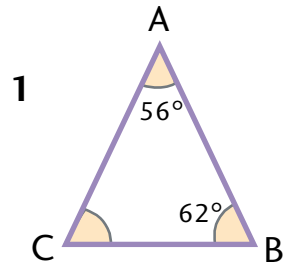
11

Likbenta trianglar.

Underlägg 24
Färgmönster 15

Hur stor är vinkeln C?

Basvinklarna på en likbent triangel är lika stora.



13° **19**

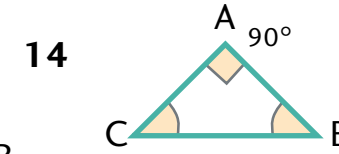
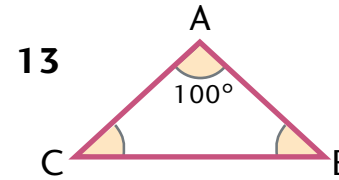
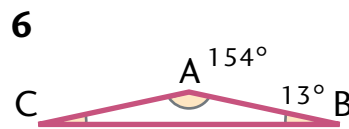
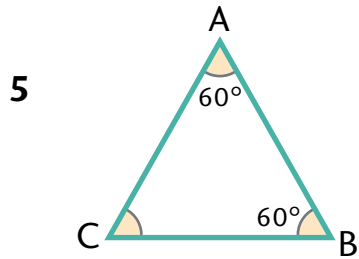
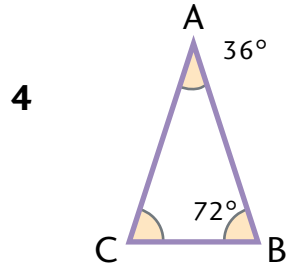
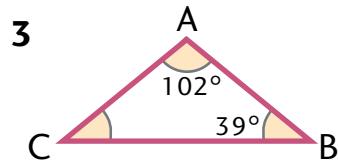
39° **23**

53° **8**

60° **6**

62° **10**

72° **21**



10° **11**

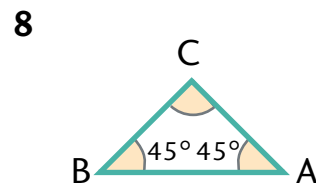
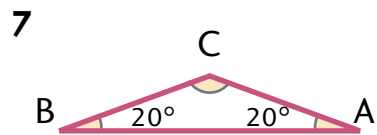
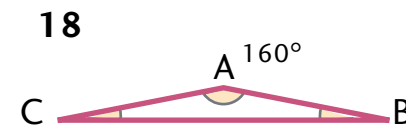
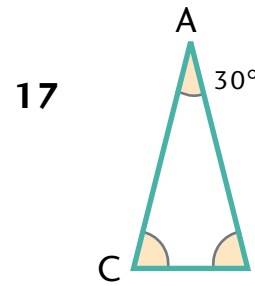
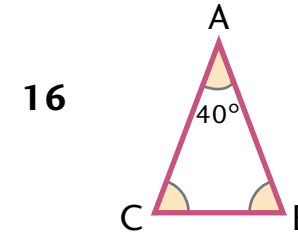
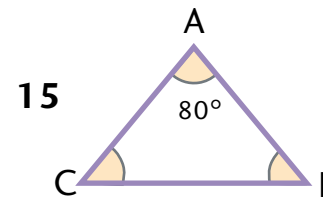
40° **22**

45° **20**

50° **24**

70° **9**

75° **14**



30° **15**

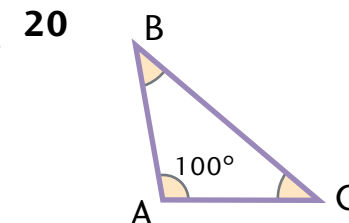
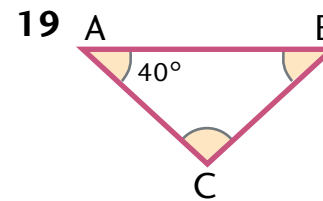
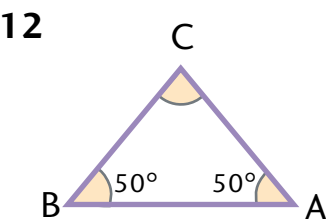
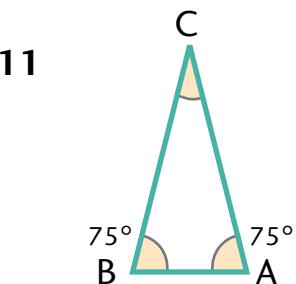
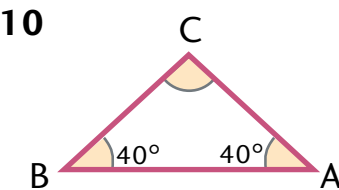
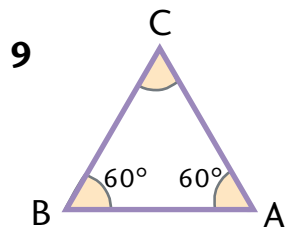
60° **12**

80° **13**

90° **4**

100° **17**

140° **2**



20° **3**

40° **16**

45° **18**

56° **5**

75° **7**

100° **1**

